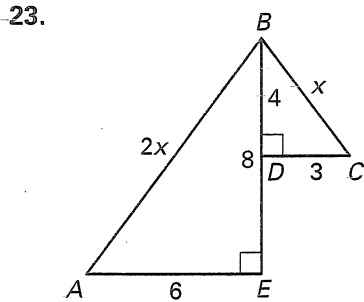
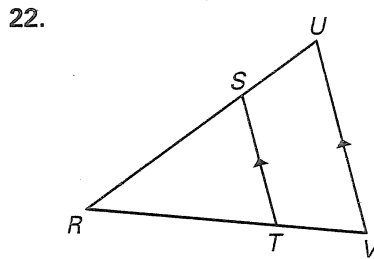
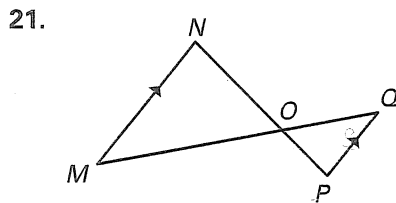
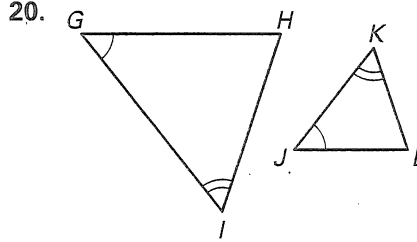
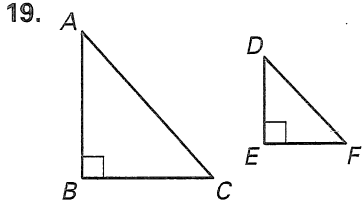


# Chapter Test C

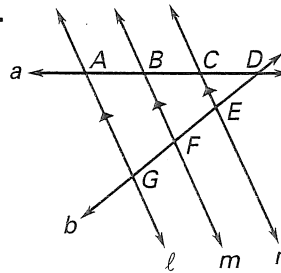
For use after Chapter 8

Are the triangles similar? If so, state the similarity and a postulate or theorem that can be used to prove that the triangles are similar.

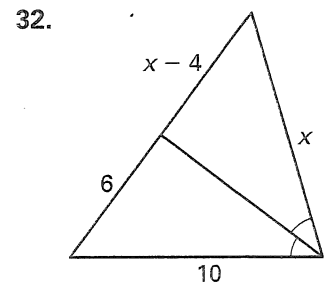
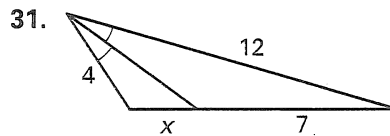
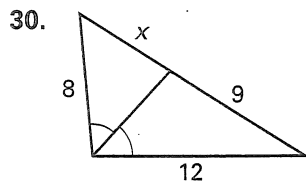


In Exercises 24–29, use the figure shown.

24.  $\frac{AB}{CB} = \frac{?}{?}$       25.  $\frac{AB}{BD} = \frac{?}{?}$   
 26.  $\frac{GF}{GE} = \frac{?}{?}$       27.  $\frac{CD}{AD} = \frac{?}{?}$   
 28.  $\frac{DE}{GF} = \frac{?}{?}$       29.  $\frac{GF}{ED} = \frac{?}{?}$



Find the value of  $x$ .



19. \_\_\_\_\_  
 \_\_\_\_\_  
 20. \_\_\_\_\_  
 \_\_\_\_\_  
 21. \_\_\_\_\_  
 \_\_\_\_\_  
 22. \_\_\_\_\_  
 \_\_\_\_\_  
 23. \_\_\_\_\_  
 \_\_\_\_\_  
 24. \_\_\_\_\_  
 \_\_\_\_\_  
 25. \_\_\_\_\_  
 \_\_\_\_\_  
 26. \_\_\_\_\_  
 \_\_\_\_\_  
 27. \_\_\_\_\_  
 \_\_\_\_\_  
 28. \_\_\_\_\_  
 \_\_\_\_\_  
 29. \_\_\_\_\_  
 \_\_\_\_\_  
 30. \_\_\_\_\_  
 \_\_\_\_\_  
 31. \_\_\_\_\_  
 \_\_\_\_\_  
 32. \_\_\_\_\_  
 \_\_\_\_\_