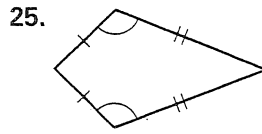
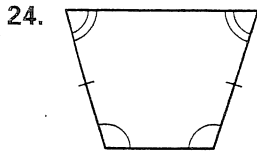
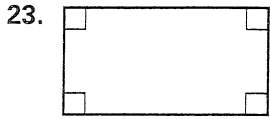


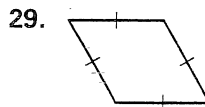
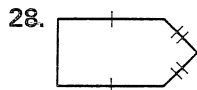
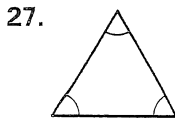
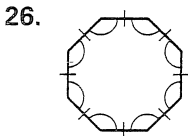
Chapter Test C

For use after Chapter 6

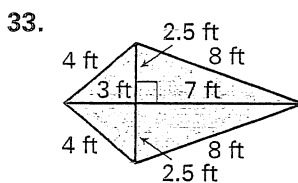
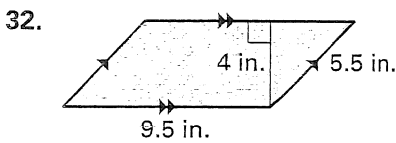
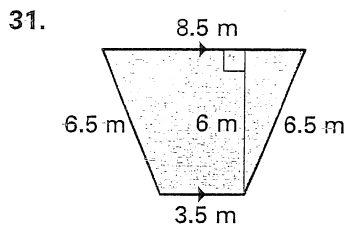

What special type of quadrilateral is shown?



Tell whether the polygon is best described as *equiangular*, *equilateral*, *regular*, or *none of these*.



Find the area of the quadrilateral.



- 23. _____
- 24. _____
- 25. _____
- 26. _____
- 27. _____
- 28. _____
- 29. _____
- 30. _____
- 31. _____
- 32. _____
- 33. _____
- 34. See left. _____
- 35. See left. _____
- 36. See left. _____
- 37. See left. _____

Draw a figure that fits the given description.

- 34. an equiangular quadrilateral
- 35. an equilateral pentagon that is not equiangular

- 36. a regular decagon
- 37. a nonconvex quadrilateral