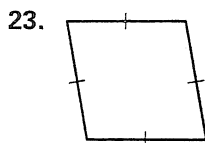
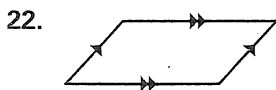
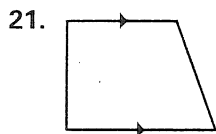


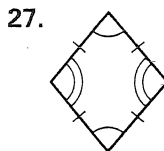
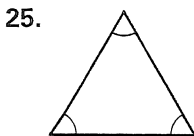
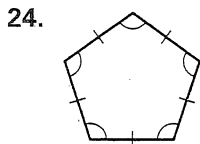
Chapter Test B

For use after Chapter 6

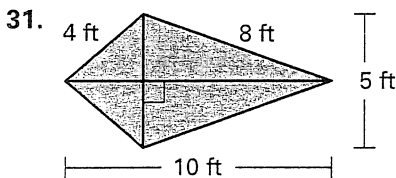
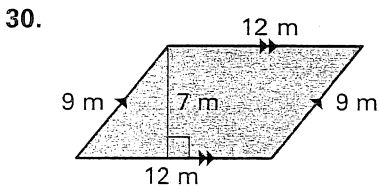
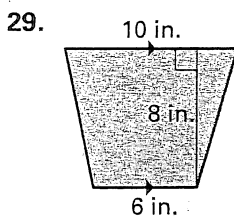
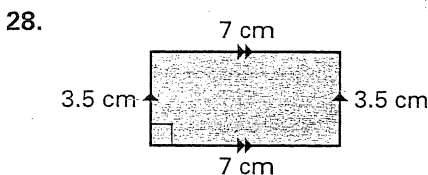
What special type of quadrilateral is shown?



Tell whether the polygon is best described as *equiangular*, *equilateral*, *regular*, or *none of these*.



Find the area of the quadrilateral.



Draw a figure that fits the description.

32. an equilateral quadrilateral 33. an equiangular pentagon

34. a regular quadrilateral 35. a concave hexagon

- 21. _____
- 22. _____
- 23. _____
- 24. _____
- 25. _____
- 26. _____
- 27. _____
- 28. _____
- 29. _____
- 30. _____
- 31. _____
- 32. See left. _____
- 33. See left. _____
- 34. See left. _____
- 35. See left. _____