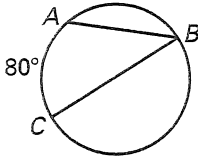


Chapter Test C

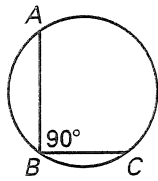
For use after Chapter 10

Find the measure of the angle or arc.

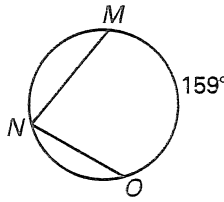
21.



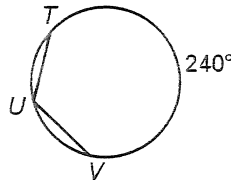
22.



23.

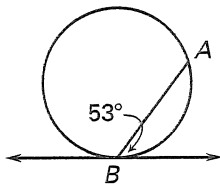


24.

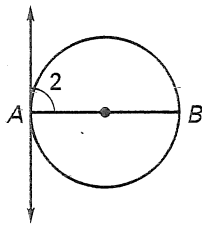


Find the indicated measure.

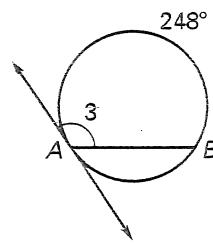
25. $m\widehat{AB}$



26. $m\widehat{AB}$

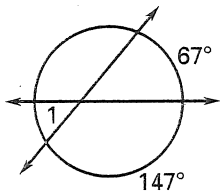


27. $m\angle 3$

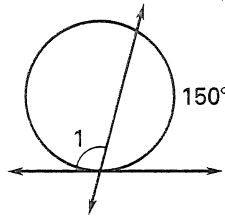


Find the measure of $\angle 1$.

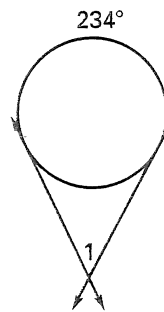
28.



29.

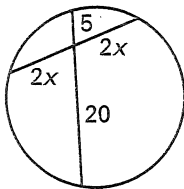


30.

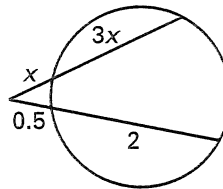


Find the value of x .

31.



32.



33. Describe the locus of points in a plane 7.2 centimeters from a given point A.

- 21. _____
- 22. _____
- 23. _____
- 24. _____
- 25. _____
- 26. _____
- 27. _____
- 28. _____
- 29. _____
- 30. _____
- 31. _____
- 32. _____
- 33. See left.