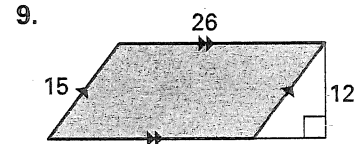
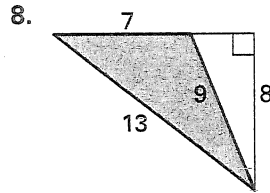
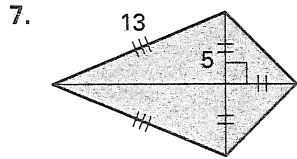
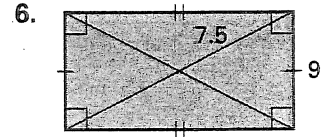
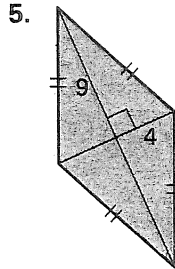
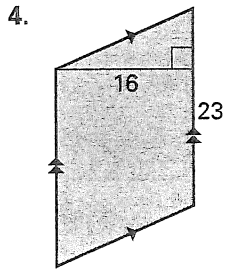
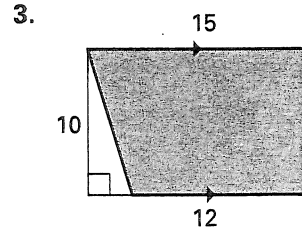
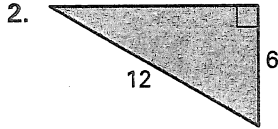
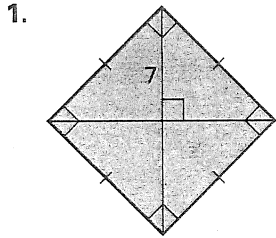


Practice C

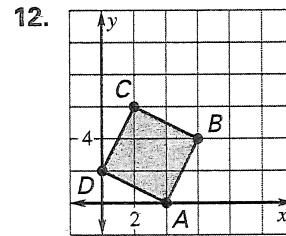
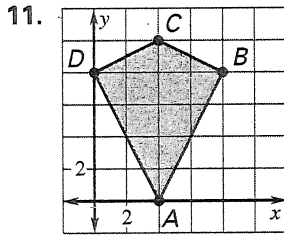
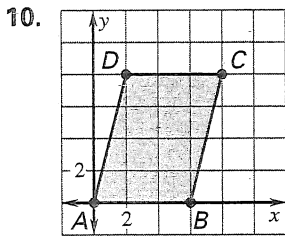
For use with pages 372–380

Find the area of the polygon.

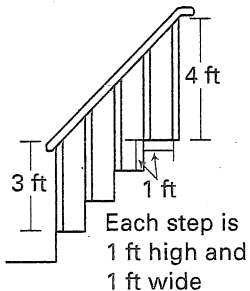


Lesson 6.7

Find the area of the quadrilateral.



13. You want to fill in the space between the handrail and steps on your front porch for the winter months. How much plywood would you need?



14. You are making a kite. The frame is to be made from two pieces of balsa wood, one measuring 64 inches and the other 38 inches. If you buy 1 square yard of material, will you have enough to piece together the covering for the kite? Explain.

