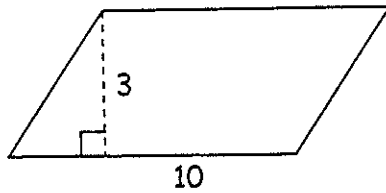
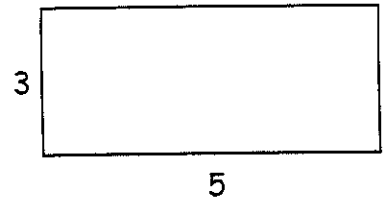


Find the exact value for area of each of the following figures. Make sure that you start by writing down the **formula** and then show ALL of your work!!!

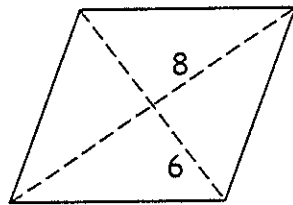
1. $A =$ _____



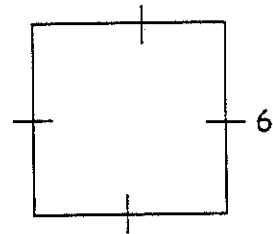
2. $A =$ _____



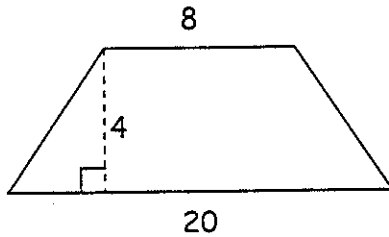
3. $A =$ _____



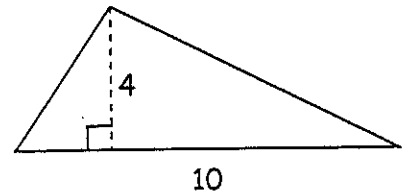
4. $A =$ _____



5. $A =$ _____



6. $A =$ _____



7. $A =$ _____

